

Transporteur de laitier  
(Composition en B)

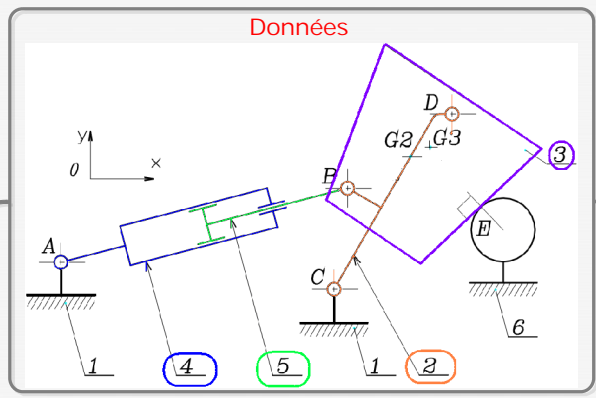
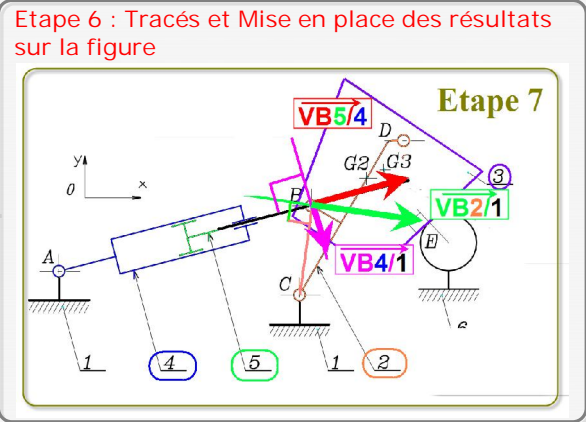
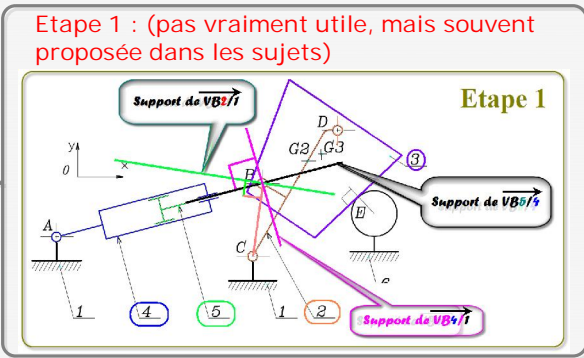


Tableau des Mvt

6+1				
1	2	3	4	
5	B		AB	
4	A			
3	e	D		
2	e			

Tableau des mvt  
Transporteur de laitier



Etape 2: Ecrire la loi de composition

$$\vec{VB2/1} = \vec{VB2/5} + \vec{VB5/4} + \vec{VB4/1}$$

Etape 2

